



Please write clearly in block capitals.

Centre number

--	--	--	--	--

Candidate number

--	--	--	--

Surname

Forename(s)

Candidate signature

I declare this is my own work.

GCSE COMBINED SCIENCE: TRILOGY

H

Higher Tier
Physics Paper 1H

Time allowed: 1 hour 15 minutes

Materials

For this paper you must have:

- a ruler
- a scientific calculator
- the Physics Equations Sheet (enclosed).

Instructions

- Use black ink or black ball-point pen.
- Pencil should be used for drawing.
- Fill in the boxes at the top of this page.
- Answer **all** questions in the spaces provided.
- If you need extra space for your answer(s), use the lined pages at the end of this book. Write the question number against your answer(s).
- Do all rough work in this book. Cross through any work you do not want to be marked.
- In all calculations, show clearly how you work out your answer.

Information

- The maximum mark for this paper is 70.
- The marks for questions are shown in brackets.
- You are expected to use a calculator where appropriate.
- You are reminded of the need for good English and clear presentation in your answers.

For Examiner's Use	
Question	Mark
1	
2	
3	
4	
5	
6	
TOTAL	



JUN218464P1H01

IB/M/Jun21/E6

8464/P/1H

There are no questions printed on this page

*Do not write
outside the
box*

**DO NOT WRITE ON THIS PAGE
ANSWER IN THE SPACES PROVIDED**



0 1

Figure 1 shows a mobile phone with its battery removed.

Figure 1



A student measured the potential difference across the battery and then put the battery into the phone.

0 1 . 1

What is the equation linking current (I), potential difference (V) and resistance (R)?

[1 mark]

Tick (✓) **one** box.

- $I = VR$
- $R = IV$
- $V = IR$
- $V = I^2 R$

Question 1 continues on the next page

Turn over ►



0 1 . 2

The current in the electronic circuit in the mobile phone was 0.12 A.

The potential difference across the battery was 3.9 V.

Calculate the resistance of the electronic circuit in the mobile phone.

[3 marks]

Resistance = _____ Ω



0 1 . 3 Write down the equation which links energy (E), power (P) and time (t).

[1 mark]

0 1 . 4 The battery was fully charged when it was put into the mobile phone.

The battery discharged when the mobile phone was switched on.

The average power output of the battery as it discharged was 0.46 watts.

The time taken to fully discharge the battery was 2500 minutes.

Calculate the energy transferred by the battery.

[3 marks]

Energy transferred = _____ J

Question 1 continues on the next page

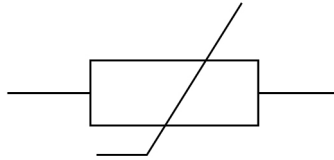
Turn over ►



The mobile phone includes a sensor to monitor the temperature of the battery.

Figure 2 shows the circuit symbol for a component used in the sensor.

Figure 2



0 1 . 5

What component does the circuit symbol shown in **Figure 2** represent?

[1 mark]

0 1 . 6

The temperature of the component in **Figure 2** increases.

The potential difference across the component remains constant.

Explain what happens to the current in the component.

[2 marks]

11



0 2

A radioactive source emits alpha, beta and gamma radiation.

0 2 . 1

An alpha particle is the same as a helium nucleus.

How many times bigger is the radius of a helium atom than the radius of an alpha particle?

[1 mark]

Tick (✓) **one** box.

Less than 100 times bigger

Exactly 5000 times bigger

More than 10 000 times bigger

0 2 . 2

Alpha particles can ionise atoms in the air.

What happens to an atom when it is ionised by an alpha particle?

[2 marks]

Tick (✓) **two** boxes.

A neutron in the atom becomes a proton.

The atom becomes a positive ion.

The atom gains a neutron.

The atom gains a proton.

The atom loses an electron.

Question 2 continues on the next page

Turn over ►

0	2	.	3
---	---	---	---

A spark detector is a device that can be used to detect alpha radiation.

A spark detector works by alpha particles ionising atoms in the air near a wire mesh.

A large potential difference creates a spark when the air near the wire mesh is ionised.

Suggest why a spark detector **cannot** detect beta radiation.

[1 mark]



0 3

Figure 4 shows a sailing boat crossing an ocean.

Figure 4



There is a wind turbine on the boat.

0 3 . 1

The wind turbine generates electricity to charge a battery on the boat.

Name one **other** renewable energy resource that could be used on the boat to generate electricity.

[1 mark]

0 3 . 2

The boat also has a generator that burns a fossil fuel.

The battery can be charged by either the wind turbine **or** the generator.

Give **two** reasons why this is useful.

[2 marks]

1 _____

2 _____



0 3 . 3

Explain **one** environmental impact of using fossil fuels to generate electricity.**[2 marks]**

0 3 . 4

The kinetic energy of the boat is 81 kJ.

mass of boat = 8000 kg

Calculate the speed of the boat.

[4 marks]

Speed = _____ m/s

Question 3 continues on the next page**Turn over ►**

0 3 . 5

As the boat passes over a wave, the gravitational potential energy of the boat increases by 19 600 J.

mass of boat = 8000 kg

gravitational field strength = 9.8 N/kg

Calculate the change in height of the centre of mass of the boat as it passes over the wave.

[3 marks]

Change in height = _____ m

12

Turn over for the next question

*Do not write
outside the
box*

**DO NOT WRITE ON THIS PAGE
ANSWER IN THE SPACES PROVIDED**

Turn over ►



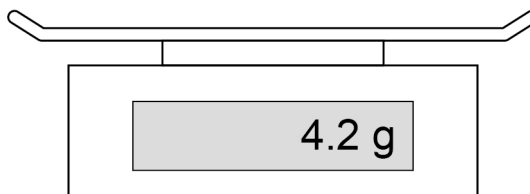
0 4

A student determined the density of a cube made of bronze.

The student used a balance to measure the mass of the bronze cube.

Figure 5 shows the balance before the cube was added.

Figure 5



0 4 . 1

What type of error is shown on the balance?

[1 mark]

0 4 . 2

How could the student get a correct value for the mass of the cube from the balance?

[1 mark]



0 4 . 3

The student measured the length of the bronze cube using Vernier callipers and then using a micrometer.

Table 1 shows the results.

Table 1

Equipment	Length in mm
Vernier callipers	20.1
Micrometer	20.14

Complete the sentence.

[1 mark]

The results in **Table 1** show that the Vernier callipers and the micrometer have a different _____.

Question 4 continues on the next page

Turn over ►



The student wanted to determine the density of a bronze coin.

The student had several identical coins.

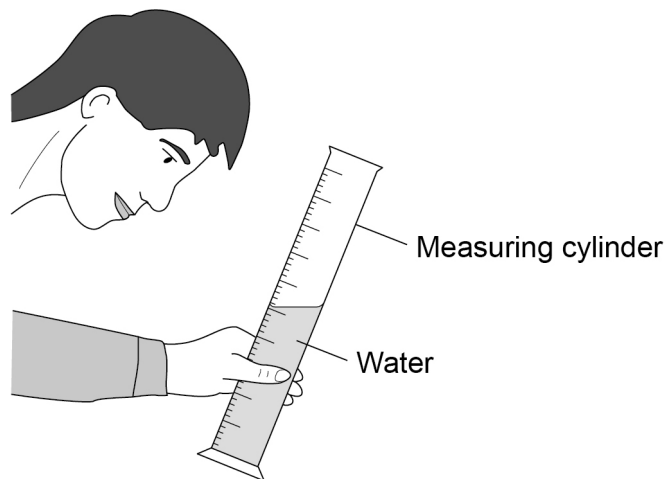
The volume of each coin was very small.

0 4 . 4

The student added water to a measuring cylinder.

Figure 6 shows the student reading the volume of water in the measuring cylinder.

Figure 6



Give **two** changes the student should make to increase the accuracy of the volume measurement.

[2 marks]

1 _____

2 _____



0 4 . 5

Describe how the student could use a displacement method to determine an accurate value for the volume of a single coin.

[3 marks]

Question 4 continues on the next page

Turn over ►

0 4 . 6

Old penny coins were made from a disc of bronze.

New penny coins are made from a disc of a different metal.

Figure 7 shows a disc of metal.

Figure 7

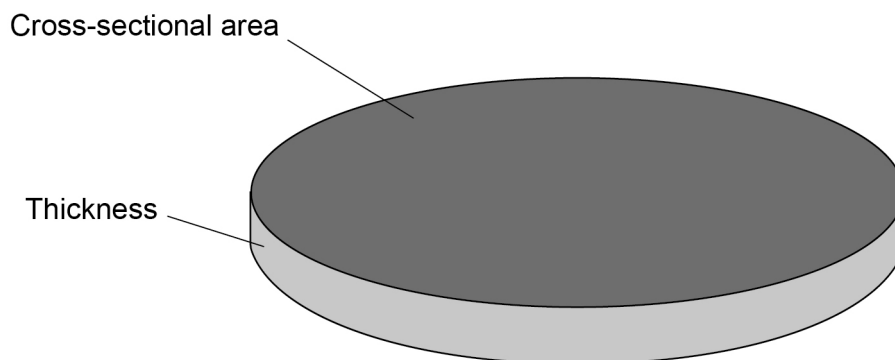


Table 2 shows information about the discs used to make each coin.

Table 2

Disc	Mass in g	Density in g/cm ³	Thickness in cm
Old penny	3.6	8.9	0.16
New penny	3.6	X	0.17

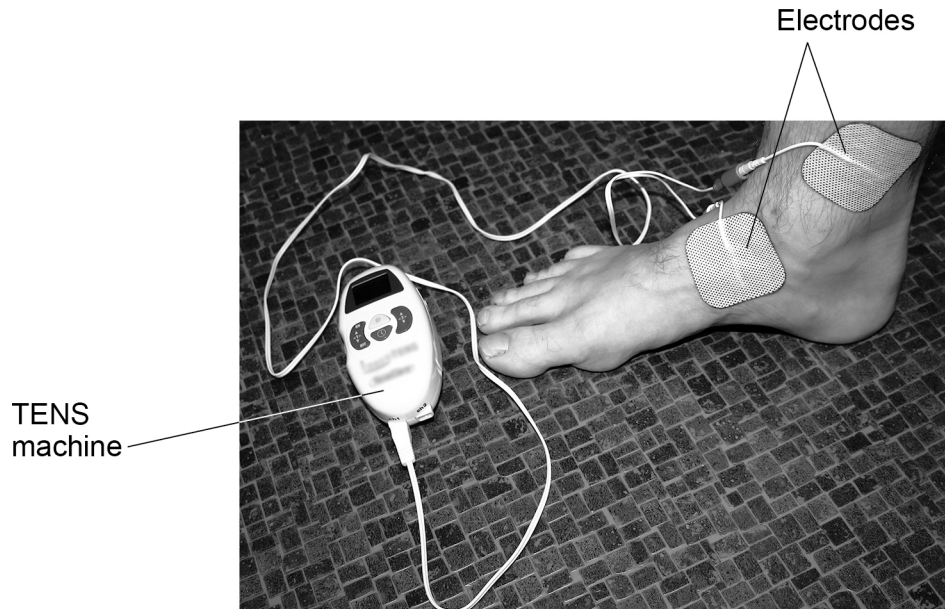


0 5

A TENS machine uses an electrical current to relieve pain.

Figure 8 shows the electrodes of a TENS machine connected across an ankle.

Figure 8



0 5 . 1

The maximum power of the TENS machine is 240 mW.

The potential difference across the battery in the TENS machine is 2.5 V.

Calculate the maximum current from the battery.

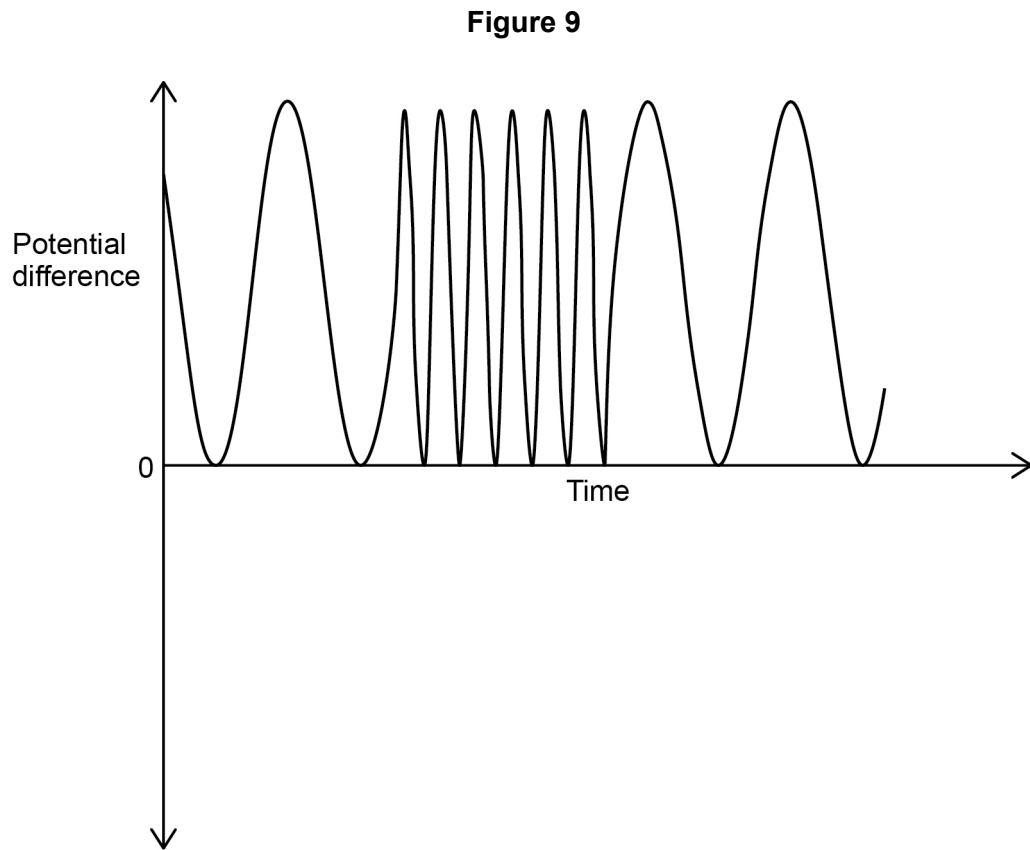
[4 marks]

Maximum current = _____ A



0 5 . 2

Figure 9 is a sketch graph showing how the potential difference across the electrodes varies with time.



A student concluded that there was an alternating potential difference across the electrodes.

How does **Figure 9** show that the student was **not** correct?

[1 mark]

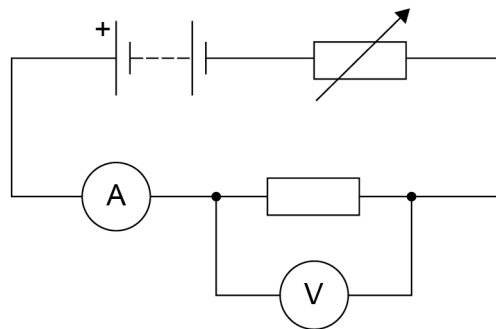
Question 5 continues on the next page

Turn over ►



Figure 10 shows a circuit the student built using the battery from the TENS machine.

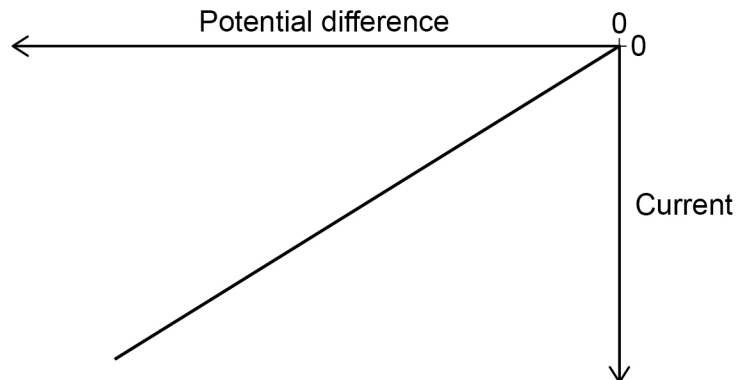
Figure 10



The student recorded how the current in the resistor varied with the potential difference across the resistor.

Figure 11 shows a sketch graph of the results.

Figure 11



0 5 . 3 What relationship does **Figure 11** show?

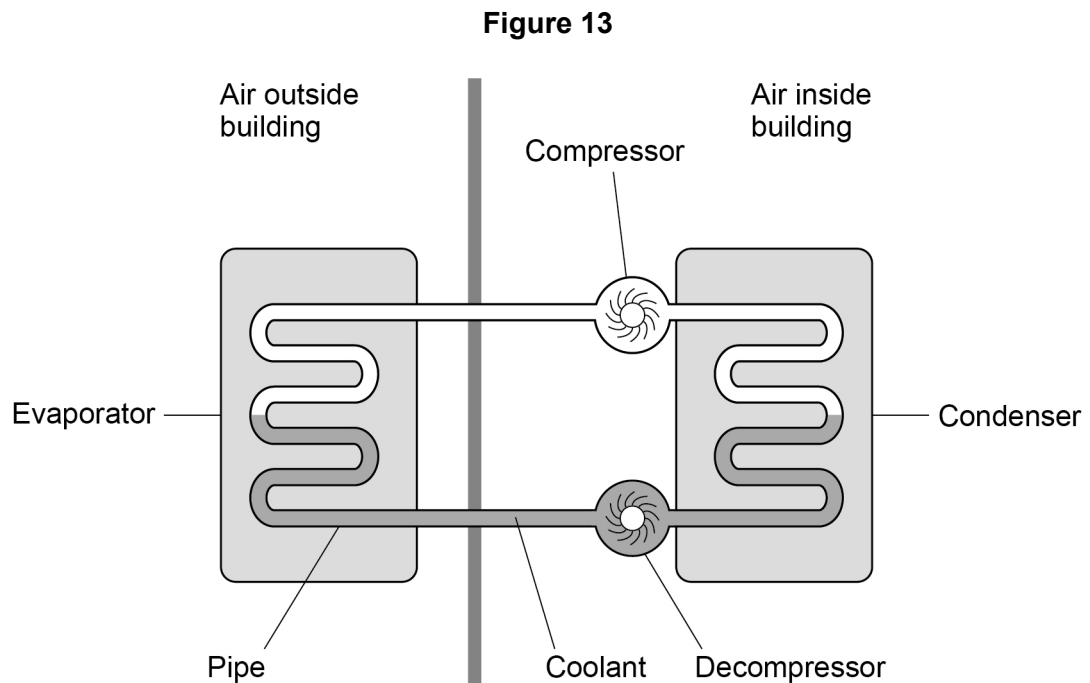
[1 mark]



0 6

An air source heat pump transfers energy from the air outside a building to increase the temperature of the air inside the building.

Figure 13 shows an air source heat pump.



The compressor is connected to the mains electricity supply.

The pipe in the heat pump contains a substance called coolant.

In the evaporator, energy is transferred from the air outside the building to the liquid coolant.

The temperature of the coolant increases and it evaporates.

0 6 . 1

Explain what happens to the internal energy of the coolant as its temperature increases.

[2 marks]



0 6 . 2

What name is given to the energy needed to change the state of the liquid coolant?

[1 mark]

0 6 . 3

What happens to the mass of the coolant as it evaporates and becomes a vapour?

[1 mark]Tick (✓) **one** box.

Decreases

Stays the same

Increases

0 6 . 4

The compressor increases the density and temperature of the coolant vapour inside the pipe.

Explain why the pressure in the pipe increases.

[2 marks]

Question 6 continues on the next page**Turn over ►**

0 6 . 6

The air in the building gains 400 J for every 100 J of energy transferred from the mains electricity supply to the compressor.

An advertisement claims that the heat pump system has an efficiency of 400%.

Explain why the advertisement is **not** correct.

[3 marks]

15

END OF QUESTIONS



There are no questions printed on this page

*Do not write
outside the
box*

**DO NOT WRITE ON THIS PAGE
ANSWER IN THE SPACES PROVIDED**



There are no questions printed on this page

*Do not write
outside the
box*

**DO NOT WRITE ON THIS PAGE
ANSWER IN THE SPACES PROVIDED**

Copyright information

For confidentiality purposes, all acknowledgements of third-party copyright material are published in a separate booklet. This booklet is published after each live examination series and is available for free download from www.aqa.org.uk.

Permission to reproduce all copyright material has been applied for. In some cases, efforts to contact copyright-holders may have been unsuccessful and AQA will be happy to rectify any omissions of acknowledgements. If you have any queries please contact the Copyright Team.

Copyright © 2021 AQA and its licensors. All rights reserved.



3 2



2 1 6 G 8 4 6 4 / P / 1 H

IB/M/Jun21/8464/P/1H